
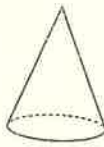


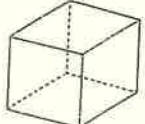



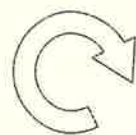


MONDAY

1. 10 minutes past 8. :
2. $4 + 7 =$
3. What month is 14.8.06?
4. $40 + 80 =$
5. Is $\frac{1}{2}$ the same as $\frac{4}{8}$? 
6. Will a cylinder roll?
7. Name this 3-D shape. 
8. Write four hundred and thirty-four as a numeral.
9. Will a cylinder stack?
10. Round 851 (nearest 100).
11. How many surfaces? 
12. 93, 92, 91,
13. Difference between 12 and 8.
14. If a block of chocolate has 20 pieces and you bought 2 blocks, how many pieces have you?
15. $1 \times 7 =$
16. km = 1000 m
17. 1 L = mL
18. 5 m = cm
19. $28 \div 7 =$
20. $6 \times 7 =$

TUESDAY

1. 25 minutes past 10. :
2. $13 - 9 =$
3. Shaded area = squares 
4. $60 + 50 =$
5. How many faces? 
6. Is $\frac{1}{2}$ the same as $\frac{7}{10}$? 
7. How many squares can you find? 
8. $5 \times 7 =$
9. $4 \times 0 =$
10. Round 949 (nearest 100).
11. Write as a fraction. 
12. Halve 98.
13. 1, 3, 6, 10,
14. $21 \div 7 =$
15. What direction? 
16. Difference between 16 and 9 =
17. What chance is there of your pencil needing sharpening today?
 impossible possible certain
18. What number comes after 369?
19. $350 + 450 =$
20. $4 \times 7 =$