





World Flags Quiz

Which countries are represented by the following flags?

Extension task – Add the continent in which each country is located.




Australia	Ecuador	Spain	South Africa	Iceland	India
China	Poland	Canada	Japan	Egypt	Pakistan

World Flags Quiz

Answers




Spain
(Europe)



Iceland
(Europe)



Australia
(Australasia)




Poland
(Europe)




Ecuador
(South America)



South Africa
(Africa)



China
(Asia)




Japan
(Asia)



India
(Asia)



Egypt
(Africa)



Pakistan
(Asia)





Canada
(North America)

World Flags Quiz

Which countries are represented by the following flags?

Extension task – Add the continent in which each country is located.



Australia

Ecuador

Spain

South Africa

Iceland

India

China

Poland


Canada

Japan


Egypt


Pakistan


World Flags Quiz





















Colombia

Greenland

Kenya

Thailand

Mongolia

Ukraine

Chile

Tanzania


Sweden

World Flags Quiz

Answers




Spain
(Europe)



Iceland
(Europe)



Australia
(Australasia)




Poland
(Europe)




Ecuador
(South America)



South Africa
(Africa)



China
(Asia)




Japan
(Asia)



India
(Asia)




Egypt
(Africa)



Pakistan
(Asia)




Canada
(North America)




Sweden
(Europe)




Thailand
(Asia)



Chile
(South America)




Kenya
(Africa)



Mongolia
(Asia)



Ukraine
(Europe)



Greenland
(North America)



Tanzania
(Africa)



Colombia
(South America)